

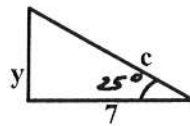
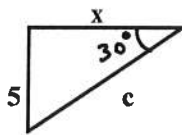
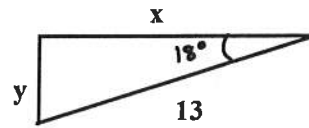
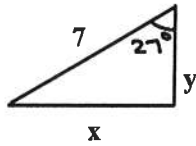
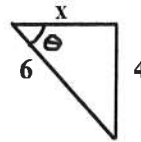
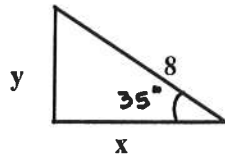
1

Trigonometry

Name: _____

Date: _____

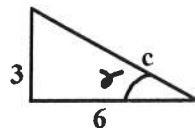
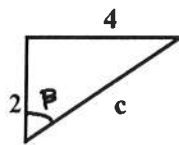
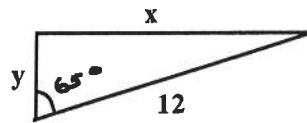
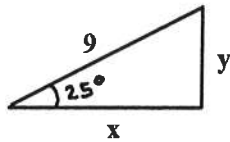
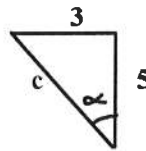
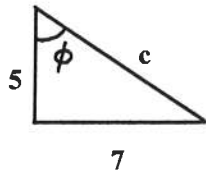
Solve each right triangle for all missing angles and sides to 3 significant figures. Show all work.



Name: _____

Date: _____

Solve each right triangle for all missing angles and sides to 3 significant figures. Show all work.



Name: _____

Date: _____

Solve each right triangle for all missing angles and sides to 3 significant figures. Show all work.

